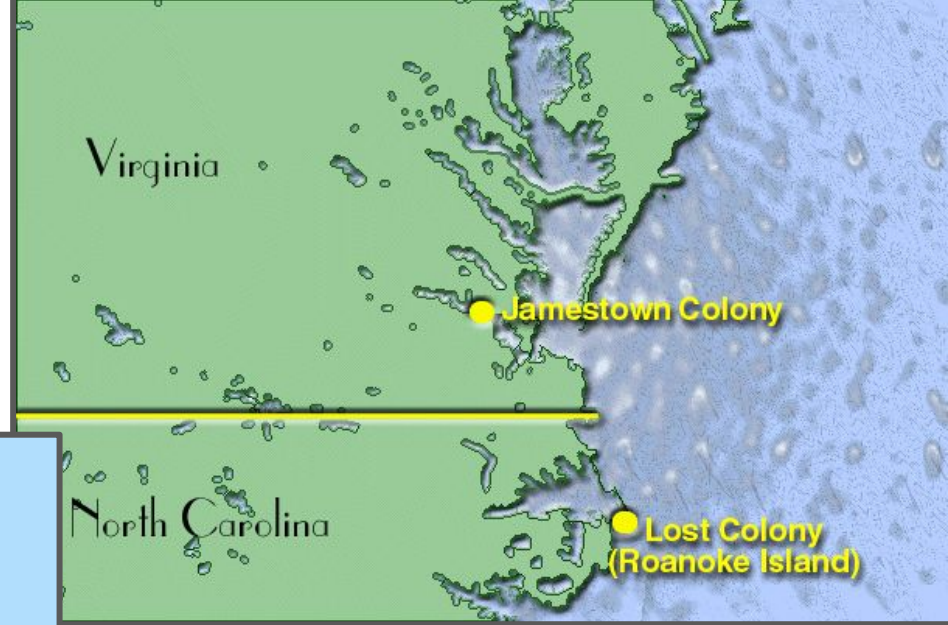


Instructions and Helpful Maps for Regional Map of Colonies

The maps on pages, 74, 80, and 86 in your textbook are helpful.

Label the Four Settlements

- Roanoke, 1587
- Jamestown, 1609
- Plymouth, 1620
- Boston, 1630



Label in **pencil**, then **blacken** your labels with **Sharpie** and **erase** your pencil planning.
Keep any **labeling lines short and straight**.
Keep your **labels horizontal**.

Label the two largest cities in the colonies. - Label in **pencil**, then **blacken** your labels with **Sharpie** and **erase** your pencil planning. Keep any **labeling lines short and straight**. Keep your **labels horizontal**.

- New York
- Philadelphia



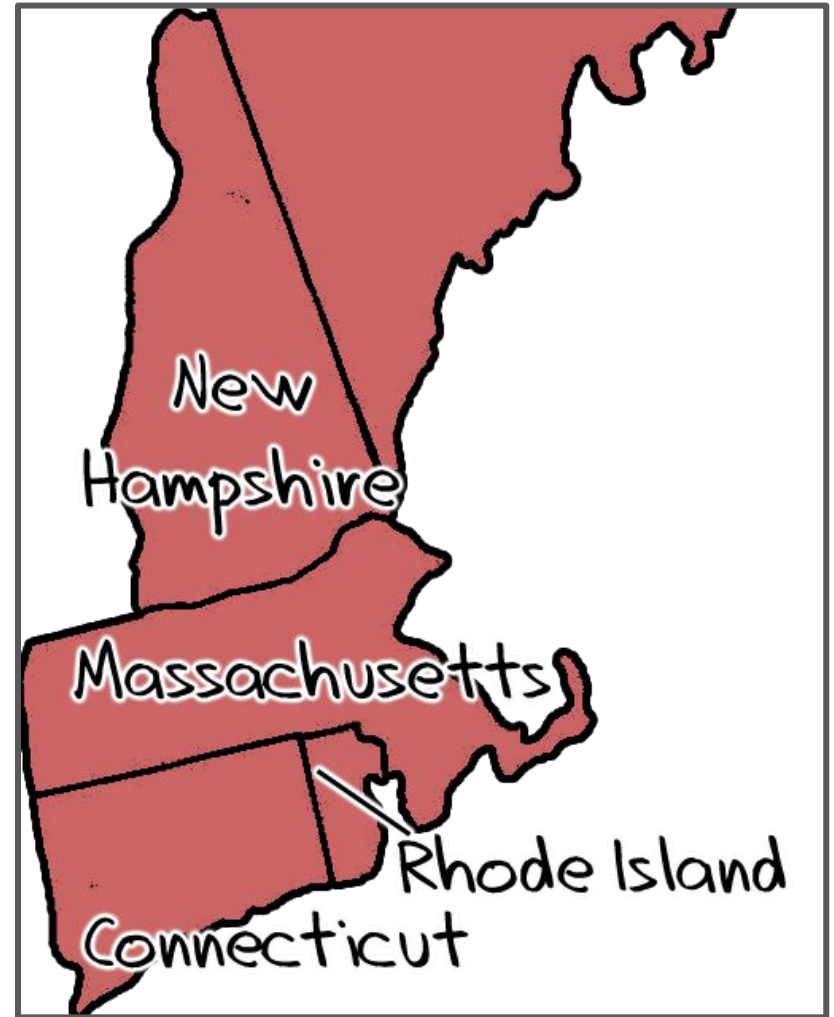
Label the New England colonies. -

Label in **pencil**, then **blacken** your labels with **Sharpie** and **erase** your pencil planning

You do not need to keep the label in the colony. Use as few labeling lines as possible.

- Massachusetts
- Rhode Island
- Connecticut
- New Hampshire

Color all four New England Colonies brown or grey, to represent the lumber or the whales.



Label the Middle Colonies. -

Label in **pencil**, then **blacken** your labels with **Sharpie**

and **erase** your pencil planning

You do not need to keep the label in the colony. Use as few labeling lines as possible.

- New York
- New Jersey
- Pennsylvania
- Delaware

Color all four Middle Colonies gold, to represent its main cash crop, wheat.



Label the Southern Colonies. -

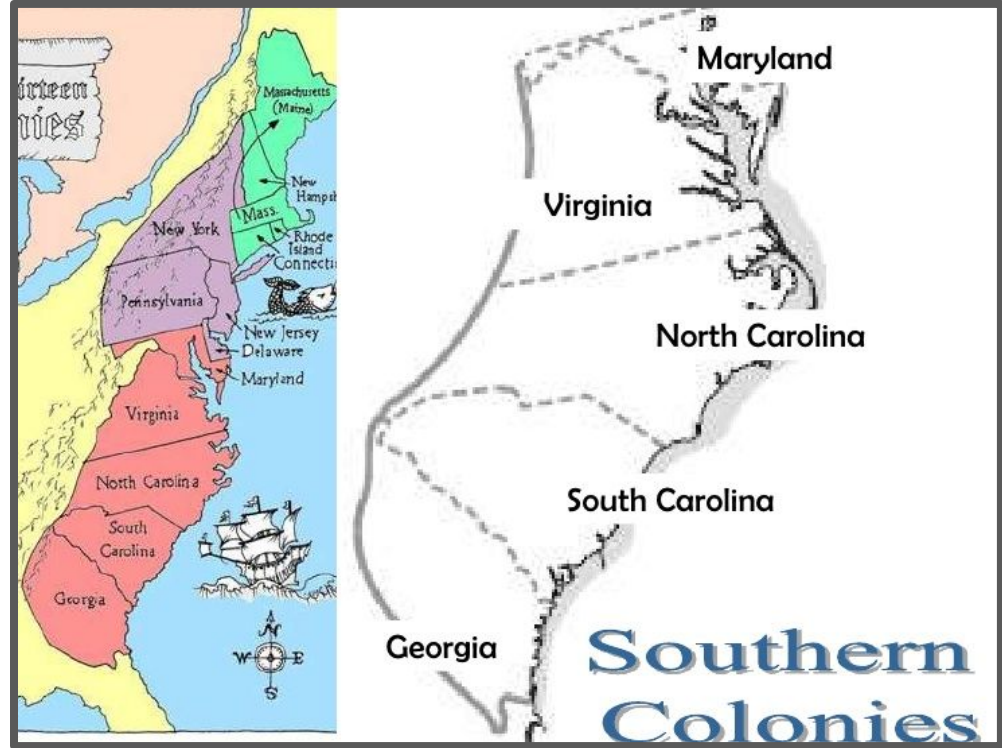
Label in **pencil**, then **blacken** your labels with **Sharpie** and **erase** your pencil planning

You do not need to keep the label in the colony.

Use as few labeling lines as possible.

- Maryland
- Virginia
- North Carolina
- South Carolina
- Georgia

Color all the Southern Colonies green, to represent its year-round growing season.



Sketch in the Backcountry.

- The southern border is about halfway down the Georgia border.
- The southern border extends about as far west as Detroit.
- The border slopes north hitting Lake Erie about at the middle of its southern shore.
- The region follows Lake Erie and Lake Ontario and the the Saint Lawrence..
- The northern border is a bit south of the northern tip of New Hampshire.

Color the Backcountry orange, the color of the Scots Irish people who are the largest group in this region.

